


Ramadã Atividades

Desenhe uma linha para combinar o número com o correto número de elementos do Ramadã

2



6



4



7




1



5




3




Ramadã Atividades

Desenhe uma linha para combinar o número com o correto número de elementos do Ramadã

5




2



6



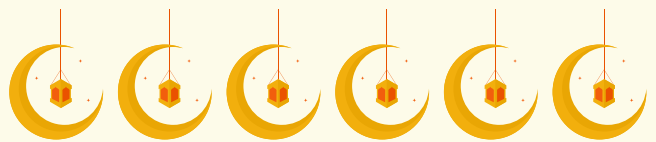
3



8



4



9

